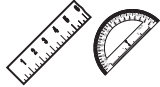


Test 8—Question 2: Geometry

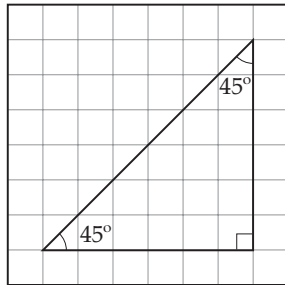
2



Use your ruler and protractor to solve this problem.

Look at the triangle on Grid 1 below. Draw a triangle on Grid 2 that is congruent to the triangle on Grid 1.

Grid 1

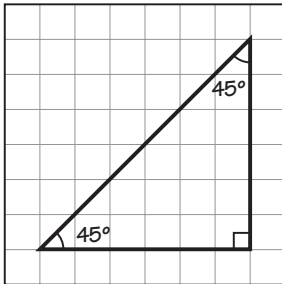


Grid 2



Exemplary Response:

- Grid 2



OR

- Congruent shape with different orientation

NOTE: Angles do not have to be labeled for full credit.

Rubric:

- | | |
|-----------------|--------------------|
| 1 point | Exemplary response |
| 0 points | Other |