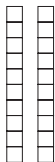





Test 8—Question 1: Number Sense

- 1 Look at the place-value model below.



What number does the place-value model represent?

Show All Work

Answer _____